

### Forces and friction 5A

1 a i  $12\cos 20^\circ = 11.3\text{N}$  (3s.f.)

ii  $12\cos 70^\circ = 12\sin 20^\circ$   
 $= 4.10\text{N}$  (3s.f.)

iii  $(11.3\mathbf{i} + 4.10\mathbf{j})\text{N}$

b i  $5\cos 90^\circ = 0\text{N}$

ii  $-5\cos 0^\circ = 5\cos 180^\circ$   
 $= -5\text{N}$

iii  $-5\mathbf{j}\text{N}$

c i  $-8\cos 50^\circ = -5.14\text{N}$  (3 s.f.)

ii  $8\cos 40^\circ = 6.13\text{N}$  (3 s.f.)

iii  $(-5.14\mathbf{i} + 6.13\mathbf{j})\text{N}$

d i  $-6\cos 50^\circ = -3.86\text{N}$  (3 s.f.)

ii  $-6\cos 40^\circ = -4.60\text{N}$  (3 s.f.)

iii  $(-3.86\mathbf{i} - 4.60\mathbf{j})\text{N}$

2 a i  $8\cos 60^\circ - 6 = -2\text{N}$

ii  $8\cos 30^\circ - 0 = 6.93\text{N}$  (3 s.f.)

b i  $6\cos 40^\circ + 5\cos 45^\circ = 8.13\text{N}$  (3 s.f.)

ii  $10 + 6\cos 50^\circ - 5\cos 45^\circ = 10.3\text{N}$  (3 s.f.)

c i  $P\cos \alpha + Q - R\cos(90^\circ - \beta) = P\cos \alpha + Q - R\sin \beta$

ii  $P\cos(90^\circ - a) - R\cos b = P\sin a - R\cos b$

3 a Using the cosine rule:

$$R^2 = 25^2 + 35^2 - (2 \times 25 \times 35 \cos 80^\circ)$$

$$R^2 = 1850 - 303.88\dots$$

$$R = 39.320\dots$$

Using the sine rule:

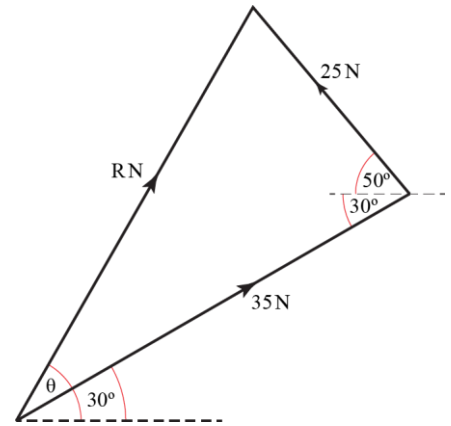
$$\frac{\sin(\theta - 30^\circ)}{25} = \frac{\sin 80^\circ}{39.320\dots}$$

$$\sin(\theta - 30^\circ) = \frac{25 \sin 80^\circ}{39.320\dots}$$

$$(\theta - 30^\circ) = 38.765\dots^\circ$$

$$\theta = 68.765\dots^\circ$$

The resultant force has a magnitude of 39.3 N (3s.f.) and acts at 68.8° above the horizontal (3s.f.).



b Using the cosine rule:

$$R^2 = 20^2 + 15^2 - (2 \times 20 \times 15 \cos 105^\circ)$$

$$R^2 = 780.29\dots$$

$$R = 27.933\dots$$

Using the sine rule:

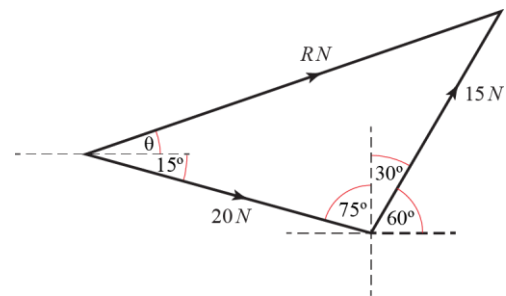
$$\frac{\sin(15^\circ + \theta)}{15} = \frac{\sin 105^\circ}{27.933\dots}$$

$$\sin(15^\circ + \theta) = \frac{15 \sin 105^\circ}{27.933\dots}$$

$$(15^\circ + \theta) = 31.244\dots^\circ$$

$$\theta = 16.244\dots^\circ$$

The resultant force has a magnitude of 27.9 N (3s.f.) and acts at 16.2° above the horizontal (3s.f.).



c Using the cosine rule then the sine rule, as before:

$$R^2 = 5^2 + 2^2 - (2 \times 5 \times 2 \cos 5^\circ)$$

$$R^2 = 9.0761\dots$$

$$R = 3.0126\dots$$

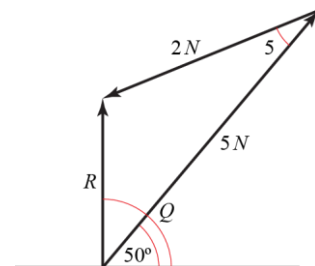
$$\frac{\sin(\theta - 50^\circ)}{2} = \frac{\sin 5^\circ}{3.0126\dots}$$

$$\sin(\theta - 50^\circ) = \frac{2 \sin 5^\circ}{3.0126\dots}$$

$$(\theta - 50^\circ) = 3.3169\dots^\circ$$

$$\theta = 53.316\dots^\circ$$

The resultant force has a magnitude of 3.01 N (3s.f.) and acts at 53.3° above the horizontal (3s.f.).



4 a Resolving horizontally:

$$B \cos \theta = 15 \cos 30^\circ + 20 \cos 30^\circ$$

$$B \cos \theta = 35 \frac{\sqrt{3}}{2} \quad (1)$$

Resolving vertically:

$$B \sin \theta = -15 \sin 30^\circ + 20 \sin 30^\circ$$

$$B \sin \theta = \frac{5}{2} \quad (2)$$

(2) ÷ (1) ⇒

$$\frac{B \sin \theta}{B \cos \theta} = \frac{5}{2} \times \frac{2}{35\sqrt{3}}$$

$$\tan \theta = \frac{1}{7\sqrt{3}}$$

$$\theta = 4.7150\dots$$

(1)<sup>2</sup> + (2)<sup>2</sup> ⇒

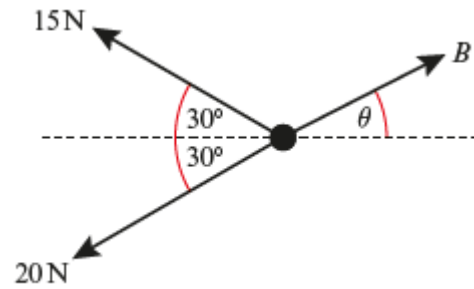
$$B^2 (\cos^2 \theta + \sin^2 \theta) = \left(35 \frac{\sqrt{3}}{2}\right)^2 + \left(\frac{5}{2}\right)^2$$

$$B^2 = \frac{(35^2 \times 3) + 25}{4}$$

$$B = \frac{\sqrt{3700}}{2}$$

$$= 30.413\dots$$

B has a magnitude of 30.4 N (3s.f.) and acts at 4.72 to the horizontal (3s.f.).



b Resolving horizontally:

$$B \cos \theta = 25 \cos 50^\circ + 10 \cos 30^\circ$$

$$B \cos \theta = 24.729\dots \quad (1)$$

Resolving vertically:

$$B \sin \theta = -10 \sin 30^\circ + 25 \sin 50^\circ$$

$$B \sin \theta = 14.151\dots \quad (2)$$

(2) ÷ (1) ⇒

$$\frac{B \sin \theta}{B \cos \theta} = \frac{14.151\dots}{24.729\dots}$$

$$\tan \theta = 0.57224\dots$$

$$\theta = 29.779\dots$$

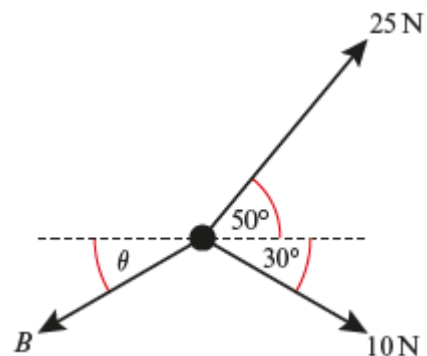
(1)<sup>2</sup> + (2)<sup>2</sup> ⇒

$$B^2 (\cos^2 \theta + \sin^2 \theta) = 14.151\dots^2 + 24.729\dots^2$$

$$B = \sqrt{811.77\dots}$$

$$= 28.491\dots$$

B has a magnitude of 28.5 N (3s.f.) and acts at 29.8° below the horizontal (3s.f.).



4 c Resolving horizontally:

$$B \cos \theta = 20 \cos 20^\circ - 10 \cos 60^\circ$$

$$B \cos \theta = 13.793... \quad (1)$$

Resolving vertically:

$$B \sin \theta = 10 \sin 60^\circ - 20 \sin 20^\circ$$

$$B \sin \theta = 1.8198... \quad (2)$$

$$(2) \div (1) \Rightarrow$$

$$\frac{B \sin \theta}{B \cos \theta} = \frac{1.8195...}{13.793...}$$

$$\tan \theta = 0.13193...$$

$$\theta = 7.5157...$$

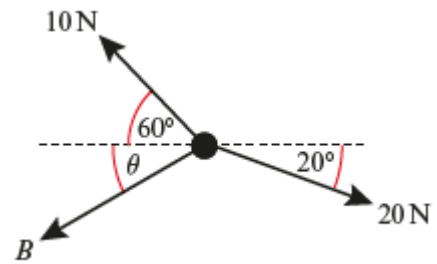
$$(1)^2 + (2)^2 \Rightarrow$$

$$B^2 (\cos^2 \theta + \sin^2 \theta) = 1.8195...^2 + 13.793...^2$$

$$B = \sqrt{193.55...}$$

$$= 13.912...$$

B has a magnitude of 13.9 N (3s.f.) and acts at 7.52° below the horizontal (3s.f.).



5 a Using Newton's second law and resolving horizontally:

$$F = ma$$

$$2 \cos 30^\circ = 5a$$

$$2 \frac{\sqrt{3}}{2} = 5a$$

$$a = \frac{\sqrt{3}}{5}$$

The box accelerates at  $\frac{\sqrt{3}}{5} \text{ ms}^{-2}$

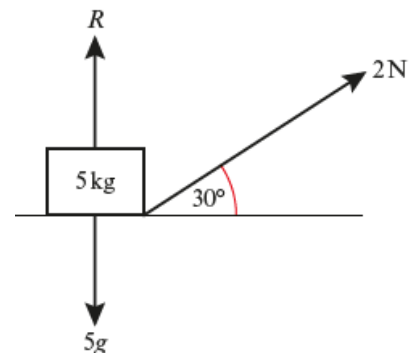
b Resolving vertically:

$$5g = R + 2 \sin 30^\circ$$

$$R = (5 \times 9.8) - 1$$

$$R = 48$$

The normal reaction of the box with the floor is 48 N.



6 Using Newton's second law and resolving horizontally:

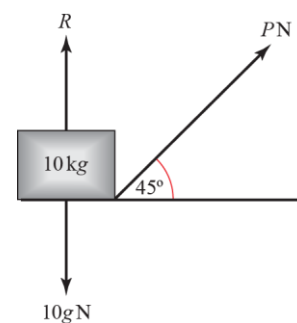
$$F = ma$$

$$P \cos 45^\circ = 10 \times 2$$

$$P = \frac{20}{\cos 45^\circ}$$

$$P = 20\sqrt{2}$$

The force P is  $20\sqrt{2}$  N.



7 Using Newton's second law and resolving horizontally:

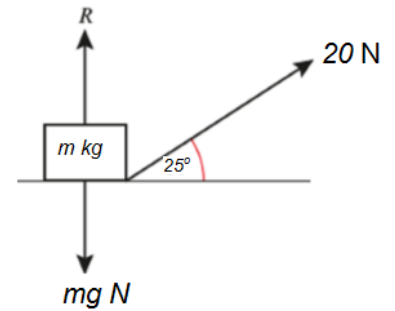
$$F = ma$$

$$20 \cos 25^\circ = 0.5m$$

$$m = 2 \times 20 \cos 25^\circ$$

$$m = 36.252\dots$$

The mass of the box is 36.3 kg.



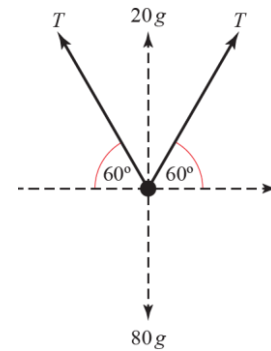
8 Resolving vertically:

$$20g + 2T \sin 60^\circ = 80g$$

$$2T \sin 60^\circ = 80g - 20g$$

$$2T \frac{\sqrt{3}}{2} = 60g$$

$$T = \frac{60g}{\sqrt{3}} = 20\sqrt{3}g \quad \text{as required.}$$



9 Resolving vertically:

$$2 = 12 - F_2 \sin 30^\circ$$

$$F_2 = \frac{12 - 2}{\sin 30^\circ}$$

$$F_2 = 20$$

Resolving horizontally:

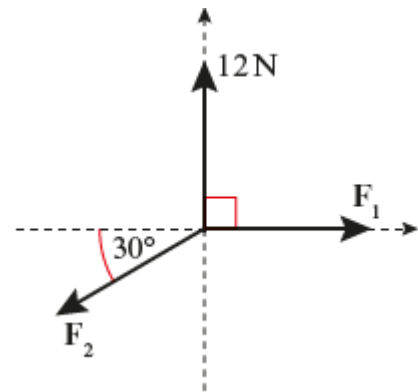
$$2\sqrt{3} = F_1 - F_2 \cos 30^\circ$$

$$F_1 = 2\sqrt{3} + 20 \cos 30^\circ$$

$$F_1 = 2\sqrt{3} + \frac{20\sqrt{3}}{2}$$

$$F_1 = 12\sqrt{3}$$

The forces  $F_1$  and  $F_2$  are  $12\sqrt{3}$  N and 20 N respectively.



**Challenge**

Resolving vertically:

$$5 = F_1 \cos 45^\circ + F_2 \cos 60^\circ$$

$$5 = \frac{F_1}{\sqrt{2}} + \frac{F_2}{2}$$

$$\frac{F_1}{\sqrt{2}} = 5 - \frac{F_2}{2} \quad (1)$$

Resolving horizontally:

$$3 = F_1 \sin 45^\circ - F_2 \sin 60^\circ$$

$$3 = \frac{F_1}{\sqrt{2}} - \frac{F_2 \sqrt{3}}{2} \quad (2)$$

Substituting  $\frac{F_1}{\sqrt{2}} = 5 - \frac{F_2}{2}$  from (1), in (2):

$$3 = 5 - \frac{F_2}{2} - \frac{F_2 \sqrt{3}}{2}$$

$$2 = \frac{F_2}{2} + \frac{F_2 \sqrt{3}}{2}$$

$$4 = (\sqrt{3} + 1)F_2$$

$$F_2 = \frac{4}{\sqrt{3} + 1}$$

$$F_2 = \frac{4(\sqrt{3} - 1)}{3 - 1}$$

$$F_2 = 2\sqrt{3} - 2$$

Substituting  $F_2 = 2\sqrt{3} - 2$  in (1):

$$\frac{F_1}{\sqrt{2}} = 5 - \left( \frac{2\sqrt{3} - 2}{2} \right)$$

$$\frac{F_1}{\sqrt{2}} = 6 - \sqrt{3}$$

$$F_1 = 6\sqrt{2} - \sqrt{6}$$

The forces  $F_1$  and  $F_2$  are  $6\sqrt{2} - \sqrt{6}$  N and  $2\sqrt{3} - 2$  N respectively.

